

**M.Sc. IN LEATHER GOODS AND  
ACCESSORIES DESIGN (MSCLGAD)**

**Term-End Examination**

**June, 2011**

**00624**

**MFW-050 : GEOMETRIC CONSTRUCTION**

*Time : 3 hours*

*Maximum Marks : 70*

---

*Note : All questions are compulsory.*

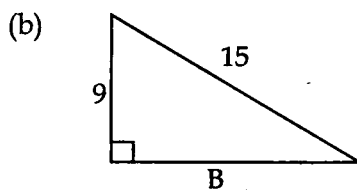
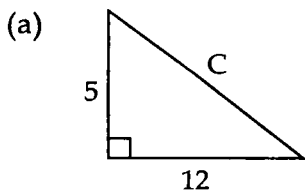
---

1. State the definition of complimentary and supplementary angles. 5
  
2. Illustrate and explain the following angles. 5
  - (a) Straight
  - (b) Acute
  - (c) Right
  - (d) Obtuse
  
3. Select the correct words from the options and fill up the space. 10
  - (a) Surface
  - (b) Line
  - (c) Straight
  - (d) Space
  - (e) Ray
  - (f) Line segment
  - (g) Solid
  - (h) Plane
  - (i) Solid Geometry
  - (j) Plane Geometry

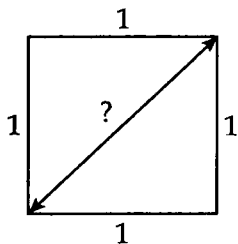
- (i) A \_\_\_\_\_ is a flat surface.
- (ii) \_\_\_\_\_ is the geometry of planar figures (two dimensional).
- (iii) \_\_\_\_\_ is the set of all points.
- (iv) \_\_\_\_\_ is a three dimensional geometric figure.
- (v) \_\_\_\_\_ is the boundary of a solid.
- (vi) A \_\_\_\_\_ is the path formed by moving points.
- (vii) A \_\_\_\_\_ is a portion of a line.
- (viii) A \_\_\_\_\_ is an infinite set of collinear points extending from one end point to infinity.
- (ix) A length of a \_\_\_\_\_ is the shortest distance between two nonadjacent points.
- (x) \_\_\_\_\_ is the geometry of three dimensional figures.

4. Solve the following triangles :

10

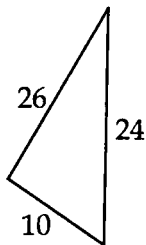


5. What is the diagonal distance across a square of size 1 ? 5

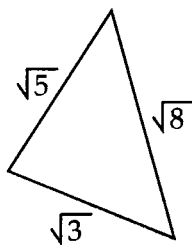


6. Do these triangles given below have Right Angle. 10

(a)



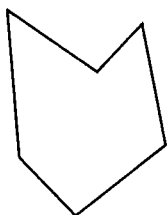
(b)



7. Does an 8, 15, 16 triangle have Right Angle or does  $8^2 + 15^2 = 16^2$  ? 5

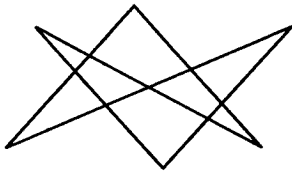
8. Which of the following most accurately describes the polygon in the diagram ? 10

(a)



- (i) Regular Hexagon
- (ii) Irregular Convex Hexagon
- (iii) Irregular Concave Hexagon
- (iv) Complex Hexagon

(b)



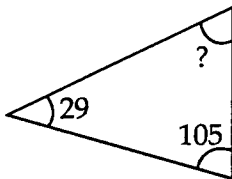
- (i) Regular Hexagon
- (ii) Irregular Concave Heptagon
- (iii) Irregular Heptagon
- (iv) Irregular Complex Hexagon

9. What do we call an eleven - sided polygon ? 1

- (a) Dodecagon
- (b) Heptadecagon
- (c) Hexadecagon
- (d) Hendecagon

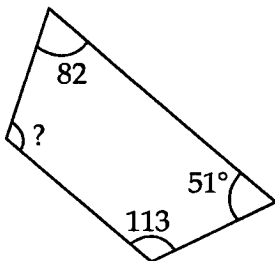
10. Identify the interior angle of the triangles given below : 9

(a)



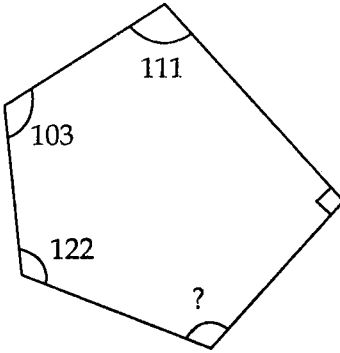
- (i)  $29^\circ$
- (ii)  $36^\circ$
- (iii)  $46^\circ$
- (iv)  $56^\circ$

(b)



- (i)  $134^\circ$
- (ii)  $129^\circ$
- (iii)  $124^\circ$
- (iv)  $114^\circ$

(c)



(i)  $108^\circ$

(ii)  $114^\circ$

(iii)  $124^\circ$

(iv)  $129^\circ$

---