

**B.Tech. Civil (Construction Management) /
B. Tech. Civil (Water Resources Engineering)**

Term-End Examination

June, 2013

00285

ET-502(A) : STRENGTH OF MATERIALS

Time : 3 hours

Maximum Marks : 70

Note : Answer any five questions. All questions carry equal marks. Use of scientific calculator is permitted.

1. (a) A rod, 150 cm long and of 2.0 cm diameter, is subjected to an axial pull of 20 kN. If the modulus of elasticity of the material of the rod is 2×10^5 N/mm²; determine :
- (i) the stress,
- (ii) the strain, and
- (iii) the elongation of the rod.
- (b) An axial pull of 35000 N is acting on a bar consisting of three lengths as shown in Figure 1. If the Young's Modulus = 2.1×10^5 N/mm², determine :
- (i) Stresses in each section and

(ii) total extension of the bar.

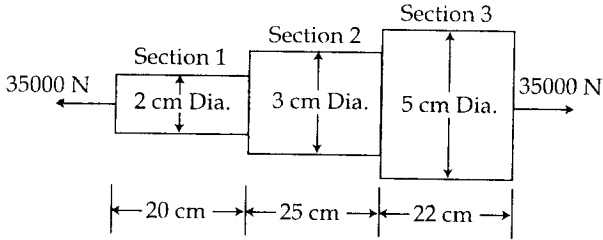


Figure - 1

2. (a) A rod is 2 m long at a temperature of 10°C . Find the expansion of the rod, when the temperature is raised to 80°C . If this expansion is prevented, find the stress induced in the material of the rod. Take $E = 1.0 \times 10^5 \text{ MN/m}^2$ and $\alpha = 0.000012$ per degree centigrade. 7
- (b) A metallic bar $300 \text{ mm} \times 100 \text{ mm} \times 40 \text{ mm}$ is subjected to a force of 5 kN (tensile), 6 kN (tensile) and 4 kN (tensile) 7

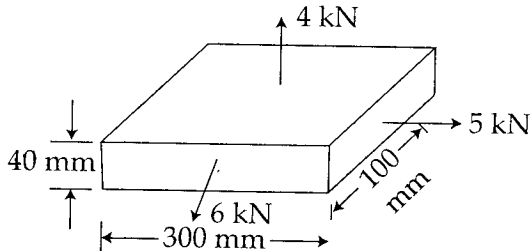


Figure - 2

along x , y and z directions respectively. Determine the change in the volume of the block. Take $E = 2 \times 10^5 \text{ N/mm}^2$ and Poisson's ratio = 0.25.

3. (a) At a point in a strained material the principal stresses are 100 N/mm^2 , (tensile) and 60 N/mm^2 (compressive). Determine the normal stress, shear stress, and resultant stress on a plane inclined at 50° to the axis of major principle stress. Also determine the maximum shear stress at the point. 7
- (b) Direct stresses of 120 N/mm^2 tensile and 90 N/mm^2 compression exist on two perpendicular planes at a certain point in a body. They are also accompanied by shear stress on the planes. The greatest principle stress at the point due to these is 150 N/mm^2 . 7
- (i) What must be the magnitude of the shearing stresses on the two planes ?
- (ii) What will be the maximum shearing stress at the point ?

4. (a) A bar of uniform cross - section 'A', and length 'L' hangs vertically, subjected to its own weight. 7

Prove that the strain energy stored within the bar is given by :

$$U = \frac{A \times \rho^2 \times L^3}{6 E} \text{ Where } E = \text{Modulus of}$$

Elasticity $\rho =$ Weight per unit volume of the bar.

- (b) A solid shaft of 150 mm diameter is used to transmit torque. Find the maximum torque transmitted by the shaft if the maximum shear stress induced to the shaft is 45 N/mm^2 . 7
8. (a) A solid steel shaft has to transmit 75 kW at 200 rpm. Taking allowable shear stress as 70 N/mm^2 , find suitable diameter for the shaft, if the maximum torque transmitted at each revolution exceeds the mean by 30%. 7
- (b) A cylindrical shell 3 m long which is closed at the ends has an internal diameter of 1 m and a wall thickness of 15 cm. Calculate the circumferential and longitudinal stresses induced, if it is subjected to an internal pressure of 1.5 N/mm^2 . 7
-

- (b) A cage weighing 60 kN is attached to the end of a steel wire rope. It is lowered down a mine shaft with a constant velocity of 1 m/sec. What is the maximum stress produced in the rope when its supporting drum is suddenly jammed? The free length of the rope at the moment of jamming is 15 m, its net cross-sectional area is 25 cm^2 and $E = 2 \times 10^5 \text{ N/mm}^2$. The self weight of the wire rope may be neglected. 7

5. (a) A simply supported beam of length 6 m, 7

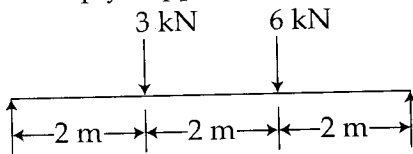


Figure - 3

Carries point load of 3 kN and 6 kN at distances of 2 m, and 4 m from the left end. Draw the shear force and bending moment diagrams for the beam.

- (b) Draw the shear force and bending moment diagrams for the over-hanging beam carrying uniformly distributed load of 2 kN/m over the entire length as shown in Figure 4. Also locate the point of contraflexure. 7

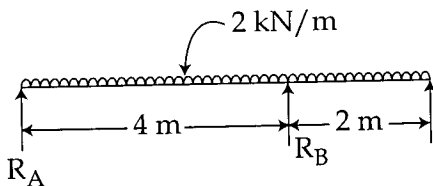


Figure - 4

6. (a) A steel plate of width 120 mm and of thickness 20 mm is bent into a circular arc of radius 10 m. Determine the maximum stress induced and the bending moment which will produce the maximum stress. Take $E = 2 \times 10^5 \text{ N/mm}^2$. 7
- (b) A rectangular beam 100 mm wide and 250 mm deep is subjected to a maximum shear force of 50 kN. Determine : 7
- Average shear stress,
 - Maximum shear stress, and
 - Shear stress at a distance of 25 mm above the neutral axis.

7. (a) A pin jointed truss of 9m is loaded as shown in Figure 5. Find the forces in the members of the truss. 7

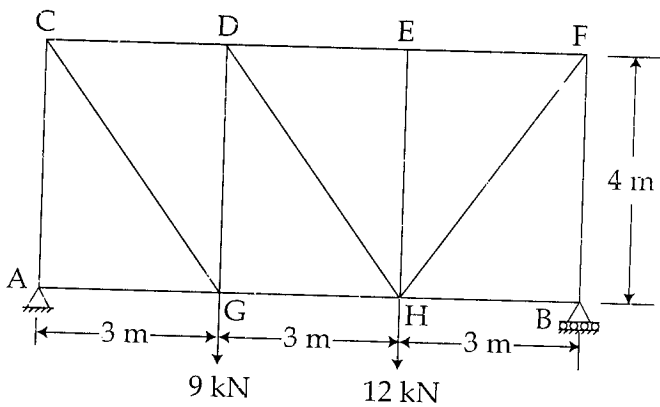


Figure - 5