

MCA (Revised) / BCA (Revised)

Term-End Examination

December, 2022

MCS-021 : DATA AND FILE STRUCTURES

Time : 3 hours

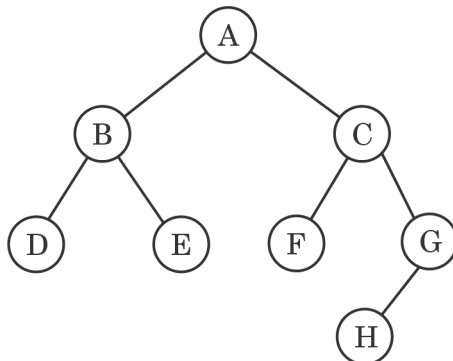
Maximum Marks : 100

(Weightage : 75%)

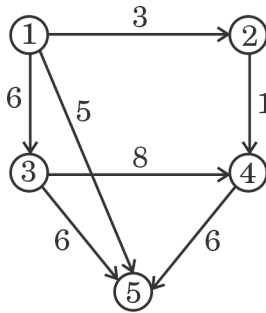
Note : Question number 1 is **compulsory**. Attempt any **three** questions from the rest. All algorithms should be written near to 'C' language.

1. (a) Write an algorithm of 2-way Merge Sort. Also discuss the advantage and disadvantage of 2-way Merge Sort. Also calculate its time complexity. 10

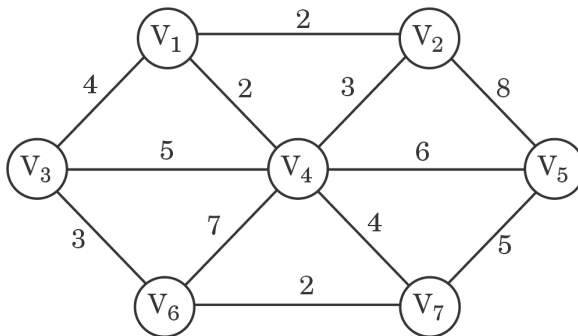
(b) Traverse the following Binary tree in Pre-order and Post-order : 10



- (c) Write the steps involved to find the shortest path from Vertex '1' of the graph given below by using Dijkstra's algorithm : 10



- (d) Write an algorithm to implement Depth First Search (DFS) method. Use the DFS method to traverse the following graph, with Vertex V_1 as the source vertex : 10



2. (a) Write short notes on the following : 10
- (i) Sequential File Organization
 - (ii) Indexed Sequential File Organization

(b) Differentiate between the following : $4 \times 2 \frac{1}{2} = 10$

(i) Heap and Tree

(ii) B-Tree and Binary Tree

(iii) B-Tree and B⁺-Tree

(iv) Binary Tree and Binary Search Tree

3. (a) What is a Red-Black tree ? Explain its properties. 5

(b) Write an algorithm of Binary Search. 5

(c) Write Selection Sort algorithm. Sort the following list using Selection Sort in descending order : 5

25, 10, 50, 21, 65, 18, 45

(d) Let 'E' denote the following algebraic expression :

$$[a + (b - c)] * [(d - e) / (f + g - h)]$$

Draw the Binary tree for 'E'. 5

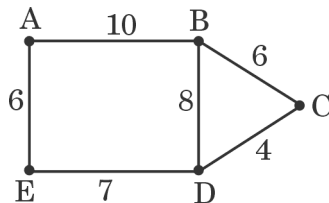
4. (a) Compute the time complexity of Bubble Sort and Quick Sort algorithm. Verify the statement "Best case for Bubble Sort is worst case for Quick Sort". 10

(b) Write algorithm and Pseudo code for the following : 10

(i) Inserting an element in a doubly linked list.

(ii) Deleting an element from a doubly linked list.

5. (a) Write Kruskal's algorithm. Find the Minimum Cost Spanning Tree of the graph given below using Kruskal's algorithm : 10



(b) What is AVL Tree ? Discuss the mechanism of the following rotations used in AVL tree : 10

(i) LL

(ii) LR

(iii) RR

(iv) RL