

**B.Tech. Civil (Construction Management) /
B.Tech. Civil (Water Resources Engineering)**

Term-End Examination

00007

December, 2017

ET-502(B) : STRUCTURAL ANALYSIS

Time : 3 hours

Maximum Marks : 70

***Note :** Attempt any **five** questions. All questions carry equal marks. Use of scientific calculator is permitted. Assume any missing data suitably.*

1. Two wheel loads 10 kN and 25 kN, spaced 2 m apart, move along the span of a simply supported girder of span 25 m. Find the maximum bending moment that can occur at a section 5 m from the left end. Any wheel load can lead the other. Use the influence line diagram to solve this problem.

14

2. A three-hinged parabolic arch of span 10 m and rise 2.5 m carries a point load of 10 kN at 2.5 m from the left end and a uniformly distributed load of 6 kN/m on the right half of the span as shown in Figure 1. Determine the reactions at A and B. Also determine the horizontal thrust.

14

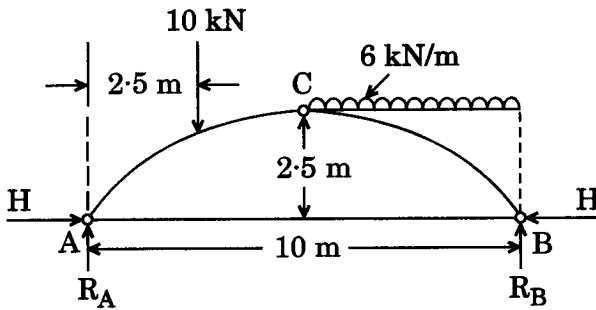


Figure 1

3. Show that the strain energy stored in the bar, as shown in Figure 2 is $\frac{7}{6} \times \frac{P^2 L}{\pi E D^2}$.

14

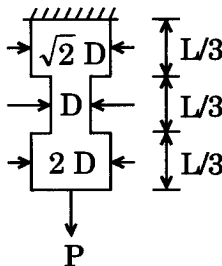


Figure 2

4. A solid column of diameter D is required to be replaced by a hollow column whose external diameter is 1.25 times the internal diameter. The column is long enough to fail by buckling only. Compute the percent saving in the material. 14
5. Analyse the continuous beam as shown in Figure 3 by slope deflection method. The supports are at the same level and the beam is of constant stiffness throughout. Also draw the bending moment diagram. 14

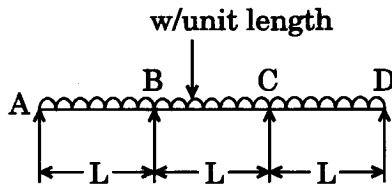


Figure 3

6. Analyse the portal frame as shown in Figure 4 by moment distribution method. The frame is fixed at A and D and has rigid joints at B and C. EI is constant. Also draw the bending moment diagram. 14

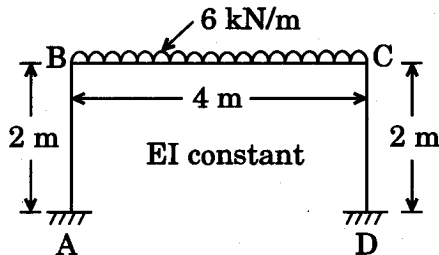


Figure 4

7. (a) Show that the shape factor for a rectangular section is 1.5. 7
- (b) A simply supported beam of span L carries a concentrated load of W at a distance 'a' from the left support and 'b' from the right support as shown in Figure 5. The plastic moment of resistance of the section is M_P . Show that the value of collapse load is $\frac{M_P L}{ab}$. 7

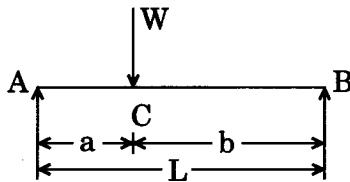


Figure 5

8. A propped cantilever beam of span L carries a uniformly distributed load of w per unit run as shown in Figure 6. Show that the reaction on the prop is $\frac{7 wL}{64}$. 14

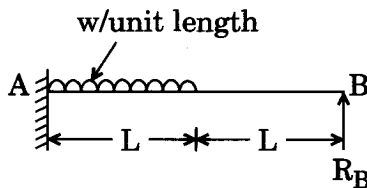


Figure 6